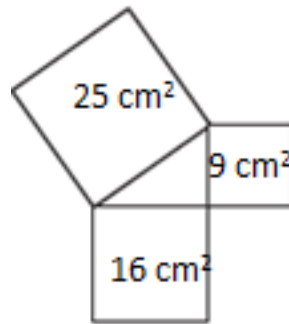


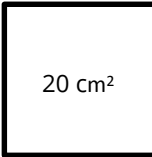







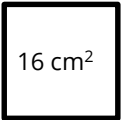
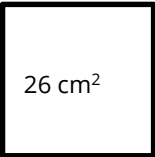


Possible Solutions

The following is an example of the Pythagorean Theorem.



Which of the following could also be an example of the Pythagorean Theorem?

- a)   
- b)   
- c)   
- d)   

- The Pythagorean Theorem states $a^2 + b^2 = c^2$ so b) is the correct solution because $5^2 + 12^2 = 13^2$ which becomes $25 + 144 = 169$.